

Je comprends...

Maya calcule le nombre de carreaux de cette méga tablette de chocolat.

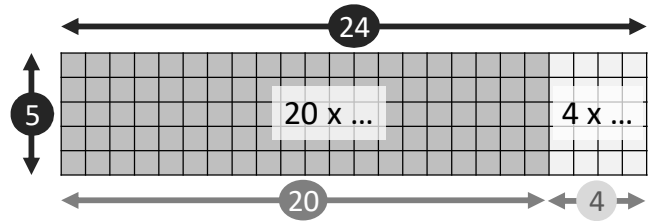


Pour calculer 24×5 , je coupe la tablette en deux.

$$24 \times 5 = (20 \times \dots) + (4 \times \dots)$$

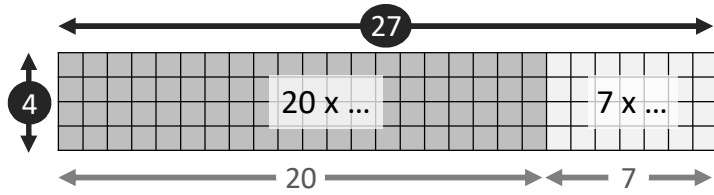
$$24 \times 5 = \dots + \dots$$

$$24 \times 5 = \dots$$



La tablette contient carreaux de chocolat.

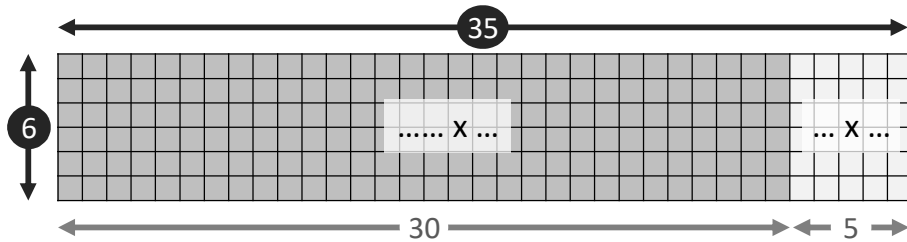
1 Complète et calcule.



$$27 \times 4 = (20 \times \dots) + (7 \times \dots)$$

$$27 \times 4 = \dots + \dots$$

$$27 \times 4 = \dots$$

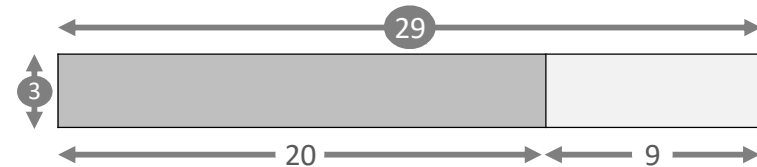


$$35 \times 6 = (\dots \times \dots) + (\dots \times \dots)$$

$$35 \times 6 = \dots + \dots$$

$$35 \times 6 = \dots$$

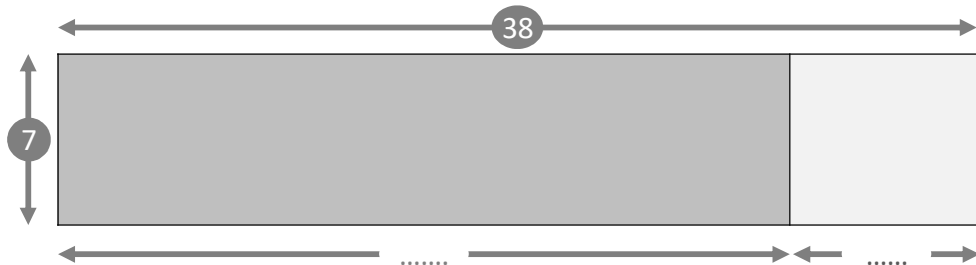
2 Complète et calcule.



$$29 \times 3 = (\dots \times \dots) + (\dots \times \dots)$$

$$29 \times 3 = \dots + \dots$$

$$29 \times 3 = \dots$$



$$38 \times 7 = (\dots \times \dots) + (\dots \times \dots)$$

$$38 \times 7 = \dots + \dots$$

$$38 \times 7 = \dots$$

3 Calcule.

$$42 \times 3 = (\dots \times 3) + (\dots \times 3) = \dots + \dots = \dots$$

$$4 \times 61 = (4 \times \dots) + (4 \times \dots) = \dots + \dots = \dots$$

$$59 \times 5 = (\dots \times \dots) + (\dots \times \dots) = \dots + \dots = \dots$$

$$82 \times 5 = \dots = \dots + \dots = \dots$$

